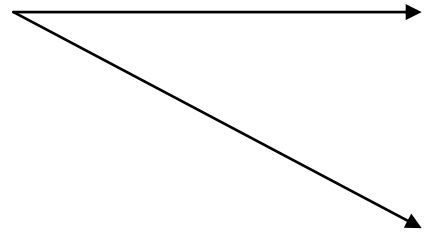
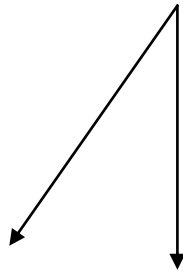
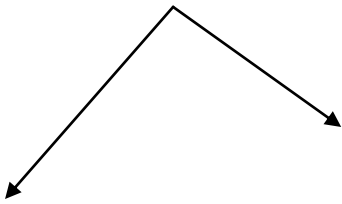
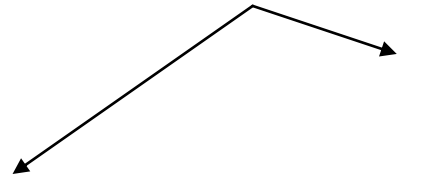
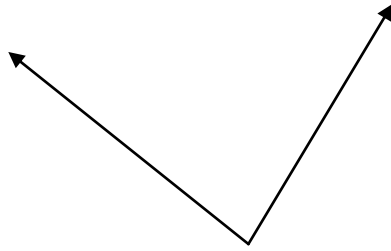
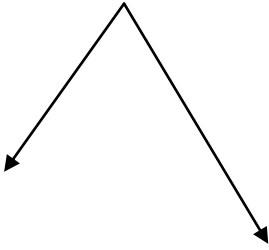
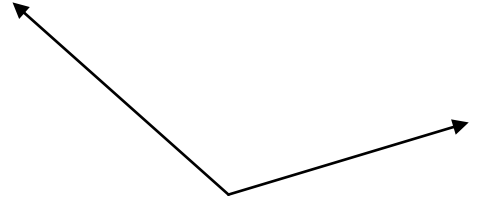
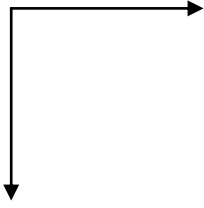
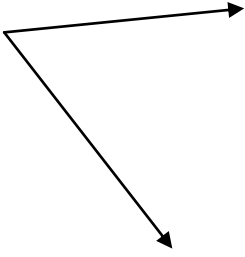
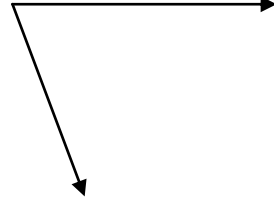
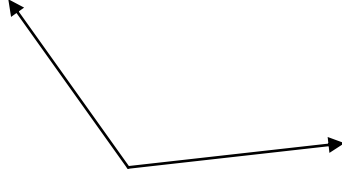
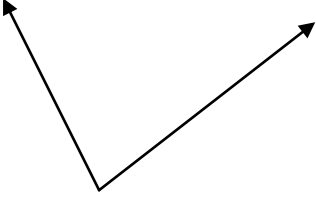


SORULAR

A) Aşağıda açılar verilmiştir.

- Açılara isim vererek sembolle gösteriniz.
- Açıların ölçülerini iletki yardımıyla ölçerek üzerine yazınız.
- Açıların köşesini ve kenarlarını gösteriniz.
- Açıların hangi çeşit açı olduğunu altına yazınız.



B) Aşağıda ölçüsü verilen açılarnı çiziniz.

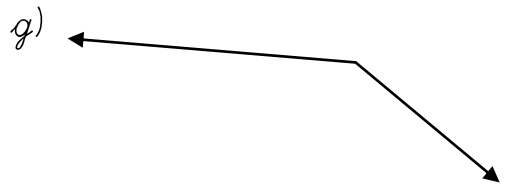
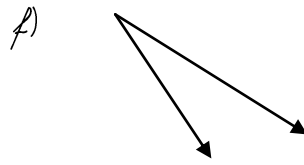
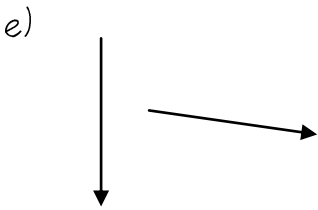
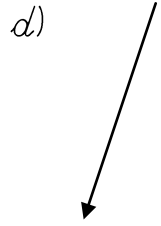
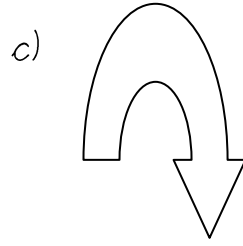
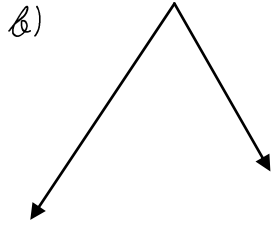
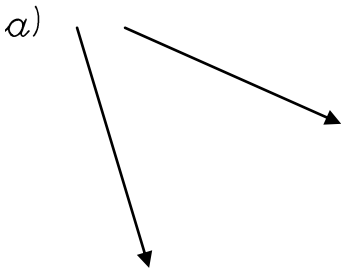
a) 30°

b) 45°

c) 60°

d) 90°

C) Aşağıdaki şekillenden hangilerini açı oluşturun? Neden?



D) Aşağıya birn tane dar açı, bir tane geniş açı, bir tane dik açı ve bir tane de doğru açı çiziniz.